



5



1



1



2




4



2



2



4

Stærðfræði



minna en

jafnt =



meira en

4




7





Nafn: _____

„Jafnt og“ =





Skriðu réttar tölur


„Minna en“ <



„Stærri en“ >




Veldu rétt merki



2	5	4	0	5	2
3	3	1	3	3	4

Veldu rétt merki



2	3	3	3	5	1
3	2	2	0	3	5
0	5	2	3	1	1

Búðu til sannar fullyrðingar

0 =

3 =

2 >

4 >

2 =

5 >

4 <

0 <

3 >

1 >

5 =

4 =

1 <

3 <

Seða Ó

3 < 4

2 = 3

5 < 0






2 > 2

5 = 5


3 > 0

0 = 1

Veldu rétt merki
> = <



Ljúktu við verkefni



4 > ___

5 > ___

4 > ___

5 > ___

4 > ___


5 > ___

4 > ___

5 > ___

5 > ___

Hvaða tvær myndir eru eins?



Hvaða hús eru eins?



Veldu rétt merki

> = <

2 < 3

4 ● 4

5 ● 1

3 ● 3

0 ● 2

2 ● 2

1 ● 0

3 ● 4

3 ● 0

2 ● 5

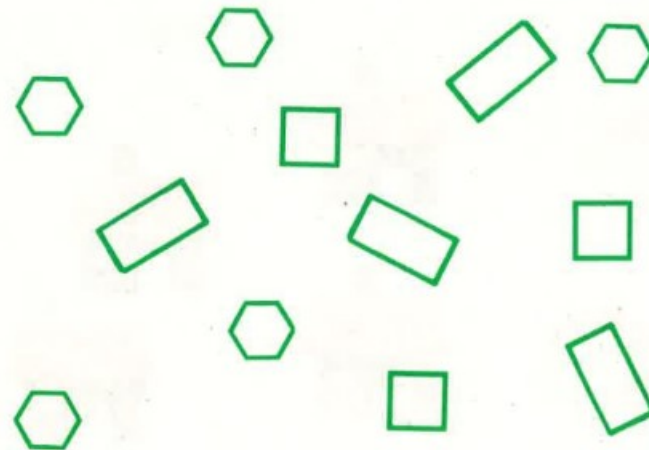
5 ● 5

1 ● 1

4 ● 1

2 ● 5

3 ● 1



Hve margir?

