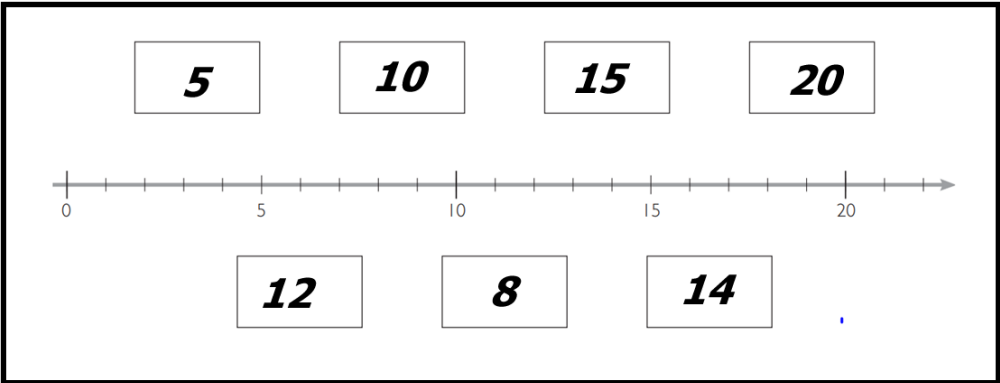

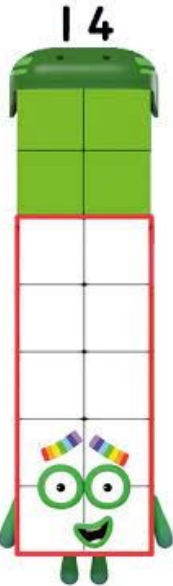


# Sudoku

2		7
	14	



# Stærðfræði 11-20



tugur



einingar



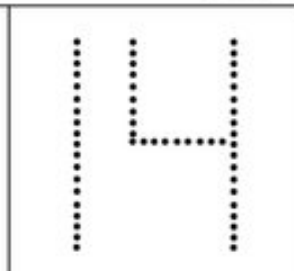



Nafn: \_\_\_\_\_  
fjórtán

$10 + 4 = \underline{\hspace{2cm}}$        $7 + 7 = \underline{\hspace{2cm}}$



$5 + 6 = \underline{\hspace{2cm}}$        $6 + 6 = \underline{\hspace{2cm}}$



Counting and tracing activity for the number 14.



Top section: 14 baseballs and a large outline of the number 14.


 +  =           

 +  =           


 +  =           

 +  =


Settu ○ utan um 14




+




= \_\_\_\_\_




+



= \_\_\_\_\_





+





= \_\_\_\_\_

14



15	11	18	14	12
14	13	14	10	18
12	14	11	14	15
16	10	12	17	14
14	13	17	19	16

<i>tugur</i>	<i>eining</i>
	
<b>10</b> <input style="width: 30px; height: 30px;" type="text"/>	<b>11</b> <input style="width: 30px; height: 30px;" type="text"/>
	<b>14</b> <input style="width: 30px; height: 30px;" type="text"/>



  





<i>tugur</i>	<i>eining</i>
	
<b>16</b> <input style="width: 30px; height: 30px;" type="text"/>	<b>18</b> <input style="width: 30px; height: 30px;" type="text"/>
	<b>12</b> <input style="width: 30px; height: 30px;" type="text"/>

<i>tugur</i>	<i>eining</i>
	
<b>13</b> <input style="width: 30px; height: 30px;" type="text"/>	<b>16</b> <input style="width: 30px; height: 30px;" type="text"/>
	<b>15</b> <input style="width: 30px; height: 30px;" type="text"/>

<i>tugur</i>	<i>eining</i>
	
<b>11</b> <input style="width: 30px; height: 30px;" type="text"/>	<b>12</b> <input style="width: 30px; height: 30px;" type="text"/>
	<b>13</b> <input style="width: 30px; height: 30px;" type="text"/>


 $+$ 

 $=$  
  

 $+$ 

 $=$  

Settu tölurnar sem vantar

11	<input style="width: 30px; height: 30px;" type="text"/>		13	<input style="width: 30px; height: 30px;" type="text"/>	16	<input style="width: 30px; height: 30px;" type="text"/>	18
13	<input style="width: 30px; height: 30px;" type="text"/>		15	<input style="width: 30px; height: 30px;" type="text"/>	15	<input style="width: 30px; height: 30px;" type="text"/>	17
17	<input style="width: 30px; height: 30px;" type="text"/>		14	<input style="width: 30px; height: 30px;" type="text"/>	18	<input style="width: 30px; height: 30px;" type="text"/>	20