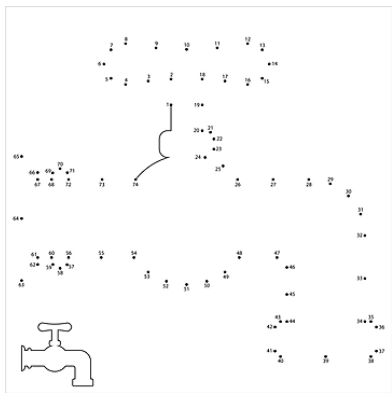


Sudoku

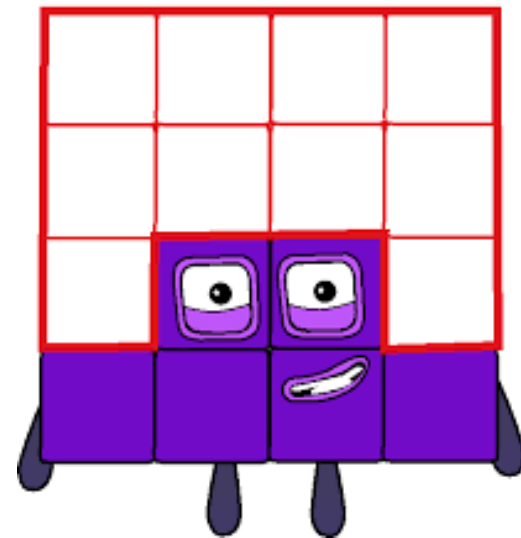
		16
	8	
0		



Stærðfræði

11-20

16



tugur



einingar

2

0

16

17



10

14

15

Nafn: _____

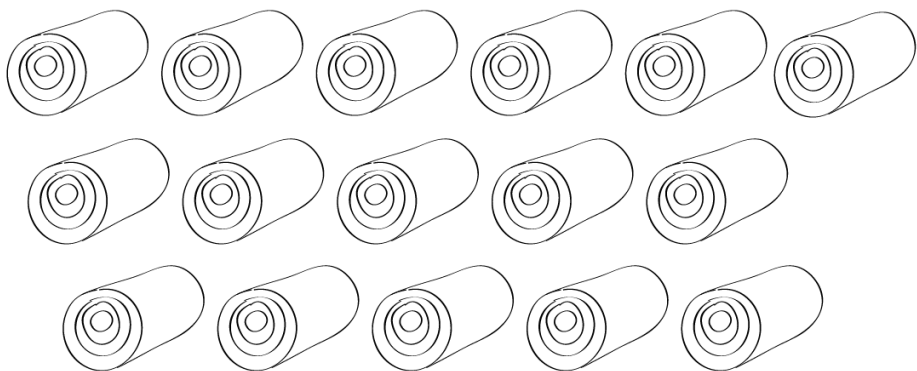
sextán

$10 + 6 = \underline{\hspace{2cm}}$


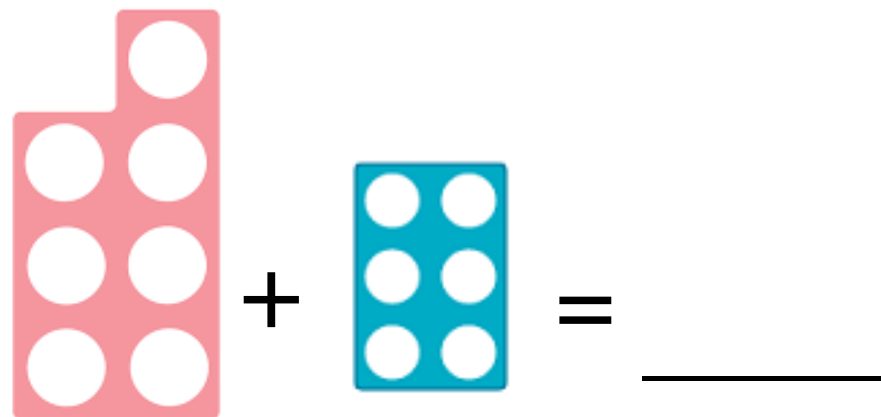

$9 + 7 = \underline{\hspace{2cm}}$

$6 + 10 = \underline{\hspace{2cm}}$


$7 + 7 = \underline{\hspace{2cm}}$




16	16	16
16	16	16
16	16	16




Settu ○ utan um 16




+




= _____




+



= _____




+



= _____

○ 16				
11	16	15	16	12
16	18	14	10	16
12	16	14	11	15
16	10	16	12	17
13	19	17	16	18



$$\begin{array}{|c|} \hline \bullet \\ \hline \bullet \\ \hline \bullet \\ \hline \bullet \\ \hline \bullet \\ \hline \end{array} + \begin{array}{|c|} \hline \bullet \\ \hline \bullet \\ \hline \bullet \\ \hline \bullet \\ \hline \bullet \\ \hline \bullet \\ \hline \end{array} = \underline{\hspace{2cm}}$$

$$\begin{array}{|c|} \hline \bullet \\ \hline \bullet \\ \hline \bullet \\ \hline \bullet \\ \hline \end{array} + \begin{array}{|c|} \hline \bullet \\ \hline \bullet \\ \hline \bullet \\ \hline \bullet \\ \hline \end{array} = \underline{\hspace{2cm}}$$

Settu tölurnar sem vantar

18			16	11		13
16			19	16		18
14			20	13		15

$$\begin{array}{|c|} \hline 10 \\ \hline \bullet \\ \hline \bullet \\ \hline \bullet \\ \hline \bullet \\ \hline \bullet \\ \hline \bullet \\ \hline \bullet \\ \hline \bullet \\ \hline \end{array} + \begin{array}{|c|} \hline 6 \\ \hline \bullet \\ \hline \bullet \\ \hline \bullet \\ \hline \bullet \\ \hline \bullet \\ \hline \bullet \\ \hline \end{array} = \underline{\hspace{2cm}}$$