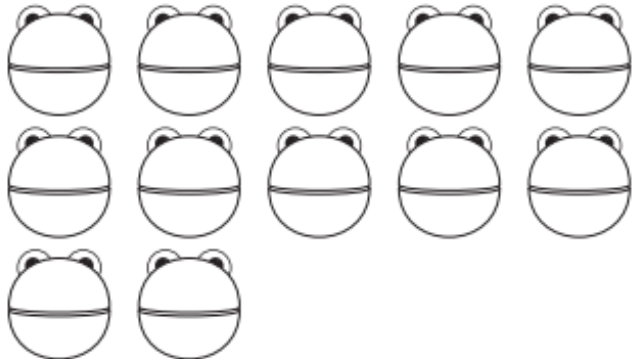






Sudoku

8	12	10

Stærðfræði 11-20

12



	<input type="text"/>
	<input type="text"/>
	<input type="text"/>
	<input type="text"/>

tugur

einingar



Nafn: _____

tólf

$10 + 2 = \underline{\hspace{2cm}}$ $6 + 5 = \underline{\hspace{2cm}}$

$6 + 6 = \underline{\hspace{2cm}}$ $7 + 5 = \underline{\hspace{2cm}}$

Finndu rétta tölu
Svarið er 12



Settu \bigcirc utan um 12

$2 + 10 = \underline{\hspace{2cm}}$


$5 + 6 = \underline{\hspace{2cm}}$



$0 + 12 = \underline{\hspace{2cm}}$



$5 + 7 = \underline{\hspace{2cm}}$



12



15	12	12	11	12
10	13	14	12	18
12	19	11	14	15
17	10	12	13	12
14	12	17	18	16





<i>tugur</i>	<i>eining</i>
	
10 <input style="width: 40px; height: 30px;" type="text"/>	11 <input style="width: 40px; height: 30px;" type="text"/>
	12 <input style="width: 40px; height: 30px;" type="text"/>


<i>tugur</i>	<i>eining</i>
	
16 <input style="width: 40px; height: 30px;" type="text"/>	18 <input style="width: 40px; height: 30px;" type="text"/>
	12 <input style="width: 40px; height: 30px;" type="text"/>


<i>tugur</i>	<i>eining</i>
	
13 <input style="width: 40px; height: 30px;" type="text"/>	16 <input style="width: 40px; height: 30px;" type="text"/>
	15 <input style="width: 40px; height: 30px;" type="text"/>


<i>tugur</i>	<i>eining</i>
	
11 <input style="width: 40px; height: 30px;" type="text"/>	12 <input style="width: 40px; height: 30px;" type="text"/>
	10 <input style="width: 40px; height: 30px;" type="text"/>



11 12 13


11 12 13


11 12 13


11 12 13


11 12 13


11 12 13