


sudoku

Stærðfræði

8



Nafn: _____

Átta

$$8 + 1 = \underline{\quad}$$

$$8 + 2 = \underline{\quad}$$

$$8 + 3 = \underline{\quad}$$

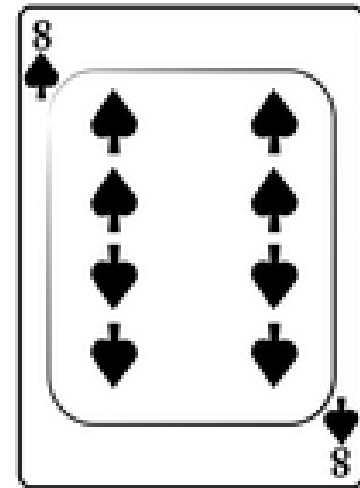
$$8 + 4 =$$

$$8 + 5 = \underline{\quad}$$

$$8 + 6 = \underline{\quad}$$

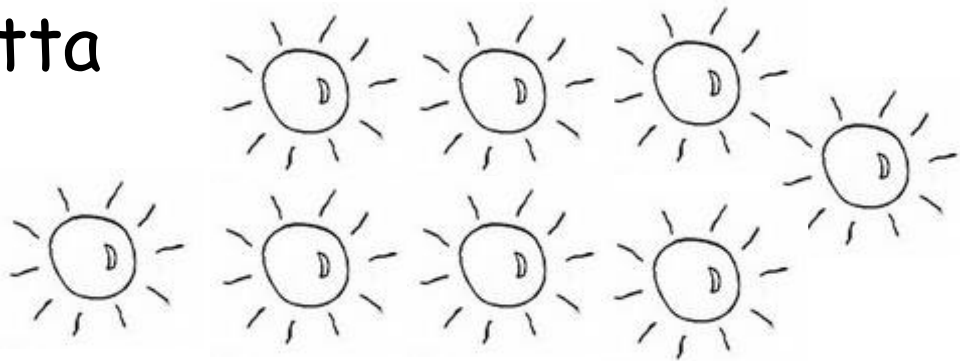
=

Átta



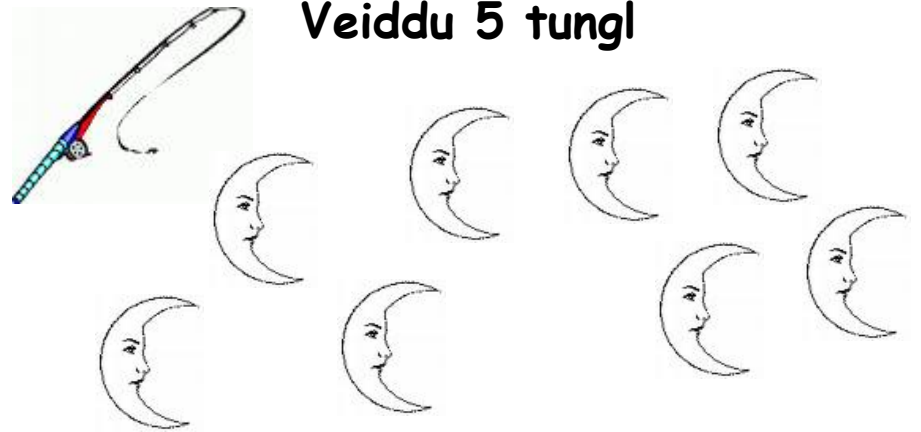
8	8	8	8

Átta




8	8	8	8


Veiddu 5 tungl



Veiddu 8 sólir



Veiddu 6 stjörnur



$5 + 8 = \underline{\quad}$	$6 + 8 = \underline{\quad}$
$3 + 8 =$ <hr style="width: 50px; margin-left: 0;"/>	$4 + 8 = \underline{\quad}$
$1 + 8 = \underline{\quad}$ $= \underline{\quad}$	$2 + 8 = \underline{\quad}$

Settu <input type="radio"/> utan um	
stærri töluna	
8	9
5	8
3	7
6	5
1	8
6	10
9	8
8	10