

Stærðfræði


Mikki mús



Nafn:

---

Hvað eru þeir margir?



+

Samtals

---

---

---

Hvað eru þeir margir?



+

Samtals

---

---

---

Hvað eru þær margar?



+


Samtals

---

---

---

Hvað eru þær margar?



+

Samtals

---

---

---

Mikki



Mikki mús

Mikki á





Mína

Mína mús



Mína og Mikki





- 1 = Gult
- 2 = Rautt
- 3 = Blátt
- 4 = Grænt

Hjálpaðu Mikka að finna Mínu



M

---

Mikki

---

mín


---

Skrifaðu 2 orð sem byrja á M

Hvað eru margir eftir?



Samtals



Moli



Mús

