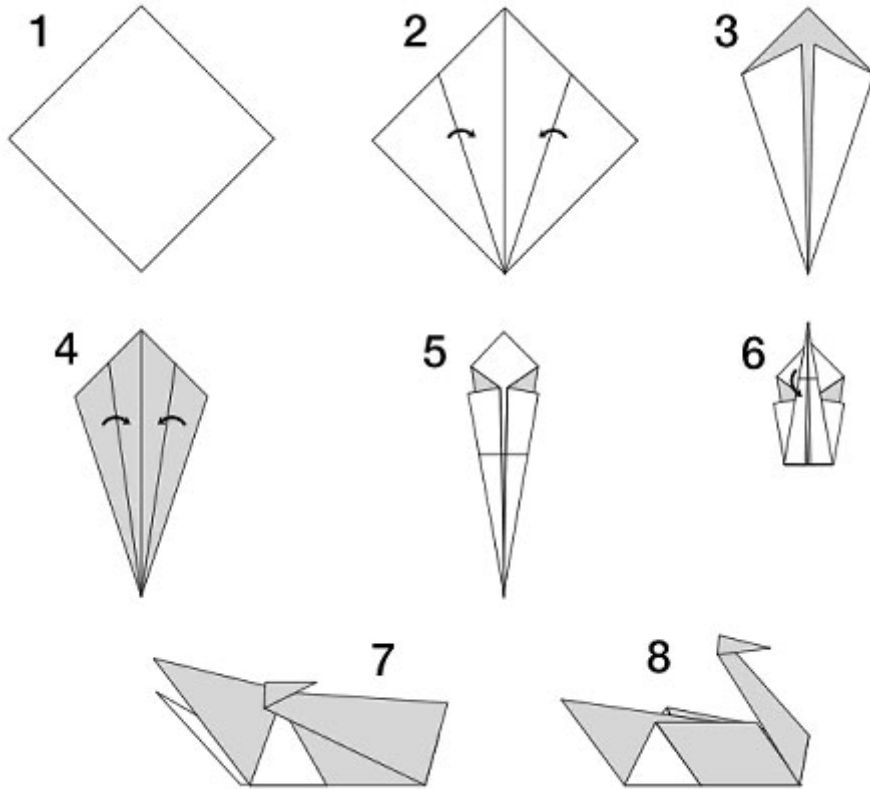










# Stærðfræði

13






Nafn: \_\_\_\_\_

|  |   |
|--|---|
|  <p>1 2 3 4 5 6 7 8</p>   |  <p>1 2 3 4 5 6 7 8</p>   |
|  <p>2 3 4 5 6 7 8 9</p>   |  <p>1 2 3 4 5 6 7 8</p>   |
|  <p>1 2 3 4 5 6 7 8</p>  |  <p>1 2 3 4 5 6 7 8</p>   |
|  <p>1 2 3 4 5 6 7 8</p> |  <p>2 3 4 5 6 7 8 9</p> |

Tengdu tölurnar saman í rétta röð

|   |   |    |
|---|---|----|
| 1 |   | 4  |
|   | 3 | 5  |
| 2 |   | 6  |
|   | 7 | 9  |
|   | 8 | 10 |



Settu ○ utan um þá sem eru **færri** ←

Settu ○ utan um þá sem eru **fleiri** →

|  |   |
|--|---|
| Settu ○ utan um <b>stærri</b> töluna → |   |
| 3                                      | 6 |
| 10                                     | 7 |
| 8                                      | 5 |
| 4                                      | 2 |
| Settu ○ utan um <b>minni</b> töluna ←  |   |
| 7                                      | 5 |
| 4                                      | 9 |
| 1                                      | 5 |