








Stærðfræði Frádráttur 1- 20

$19 - \square = 13$		$\square - 8 = 5$
$16 - \square = 11$		$\square - 12 = 7$
$15 - \square = 12$		$\square - 11 = 3$
$18 - \square = 14$		$\square - 16 = 3$
$13 - \square = 6$		$\square - 12 = 8$
$19 - \square = 2$		$\square - 16 = 9$
$21 - \square = 10$		$\square - 15 = 11$

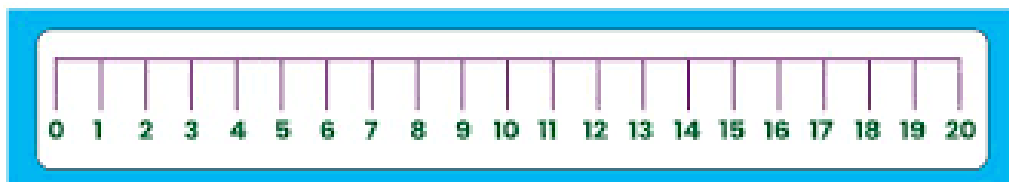
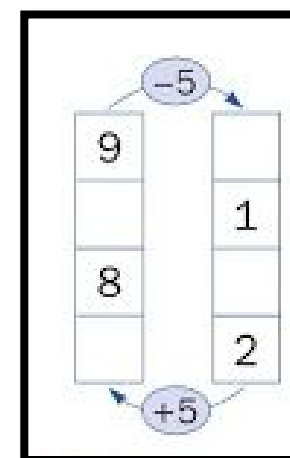


Nafn: _____

$6 - 2 =$	7	4	6	3
$4 - 4 =$	0	4	6	2
$4 - 2 =$	1	6	2	9
$7 - 2 =$	1	4	8	5
$9 - 1 =$	7	9	8	10
$5 - 0 =$	7	5	6	3
$3 - 2 =$	5	6	4	1
$9 - 3 =$	2	6	8	9

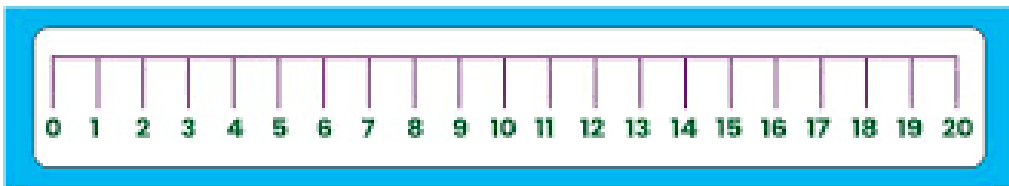
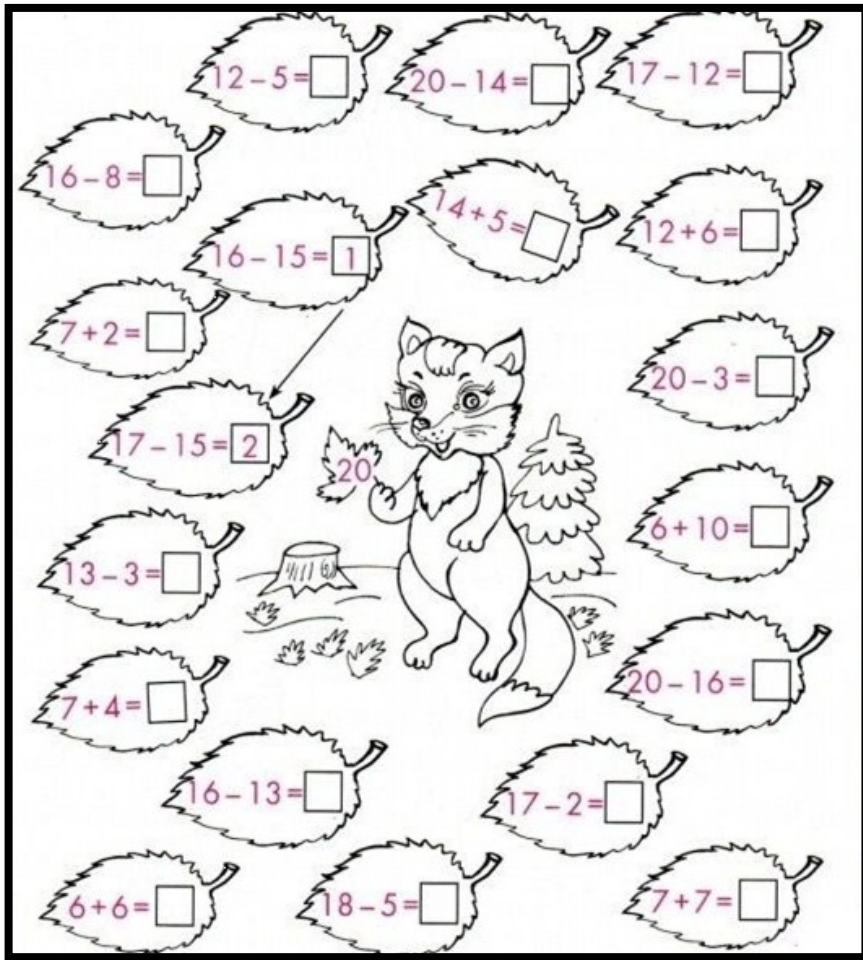


$4 - 2 =$	<input type="text"/>	$2 - 1 =$	<input type="text"/>
$5 - 1 =$	<input type="text"/>	$3 - 2 =$	<input type="text"/>
$4 - 1 =$	<input type="text"/>	$0 + 3 =$	<input type="text"/>
		$4 - 3 =$	<input type="text"/>
		$5 - 3 =$	<input type="text"/>



7

$5 + 2$ $9 - 3$ $8 - 1$ $6 + 3$ $9 - 2$
 $8 - 2$ $3 + 4$



$20 - 4 = \square$
 $14 - 6 = \square$
 $12 - 7 = \square$
 $14 - 1 = \square$
 $18 - 5 = \square$

$11 - 5 = \square$
 $16 - 8 = \square$
 $17 - 7 = \square$
 $16 - 5 = \square$
 $12 - 9 = \square$

