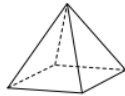
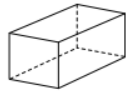
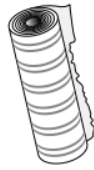


Stærðfræði
Febrúar 2025
6 ára


Hve margt af hverju?

Hve margar myndir eru af hverju formi.
Skráðu fjöldann í reitinn undir formunum.



Nafn: _____

Samlagning



$5 + 4 =$	$9 + 2 =$	$6 + 6 =$	$0 + 9 =$
$\begin{array}{r} 7 \\ + 5 \\ \hline \end{array}$	$\begin{array}{r} 9 \\ + 6 \\ \hline \end{array}$	$\begin{array}{r} 8 \\ + 8 \\ \hline \end{array}$	$\begin{array}{r} 4 \\ + 9 \\ \hline \end{array}$
$\begin{array}{r} 10 \\ + 10 \\ \hline \end{array}$	$\begin{array}{r} 11 \\ + 9 \\ \hline \end{array}$	$\begin{array}{r} 13 \\ + 6 \\ \hline \end{array}$	$\begin{array}{r} 14 \\ + 4 \\ \hline \end{array}$

Týndar tölur

$\begin{array}{r} 2 \\ + \square \\ \hline 8 \end{array}$	$\begin{array}{r} 3 \\ + \square \\ \hline 8 \end{array}$
$\begin{array}{r} 8 \\ + \square \\ \hline 9 \end{array}$	$\begin{array}{r} 7 \\ + \square \\ \hline 9 \end{array}$
$\begin{array}{r} 9 \\ + \square \\ \hline 10 \end{array}$	$\begin{array}{r} 8 \\ + \square \\ \hline 10 \end{array}$



designed by Bfreedesignfile



Frádráttur

$8 - 4 =$	$9 - 6 =$	$7 - 3 =$	$10 - 0 =$
$\begin{array}{r} 6 \\ - 2 \\ \hline \end{array}$	$\begin{array}{r} 9 \\ - 9 \\ \hline \end{array}$	$\begin{array}{r} 8 \\ - 6 \\ \hline \end{array}$	$\begin{array}{r} 7 \\ - 2 \\ \hline \end{array}$
$\begin{array}{r} 17 \\ - 11 \\ \hline \end{array}$	$\begin{array}{r} 19 \\ - 8 \\ \hline \end{array}$	$\begin{array}{r} 12 \\ - 6 \\ \hline \end{array}$	$\begin{array}{r} 14 \\ - 4 \\ \hline \end{array}$





















Týndar tölur






























$15 - \square = 12$	$18 - \square = 16$
$13 - \square = 9$	$17 - \square = 14$
$\square - 4 = 12$	$\square - 8 = 12$
$\square - 3 = 14$	$\square - 7 = 13$




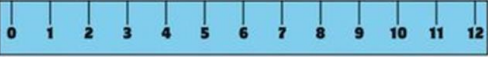





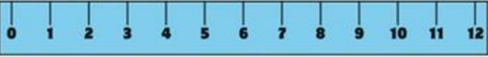

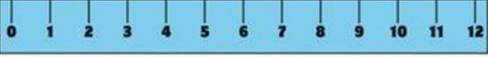
Munstur

Týndar tölur






		_____
		_____
		_____
		_____
		_____


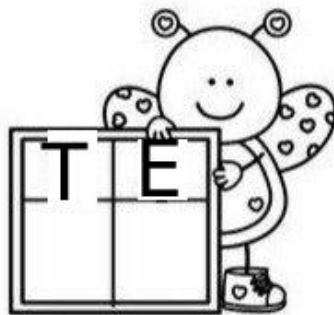
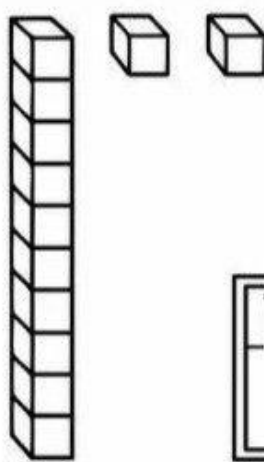




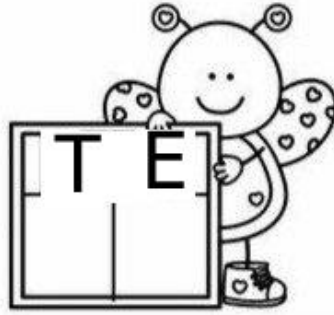






Mæla

Fáðu þér reglustiku og mældu

	_____
	_____
	_____
	_____
	_____
	_____

Tugur og eining

Borið saman mishár tölur og raðað í rétta röð

24 22 23 25 21

21 22

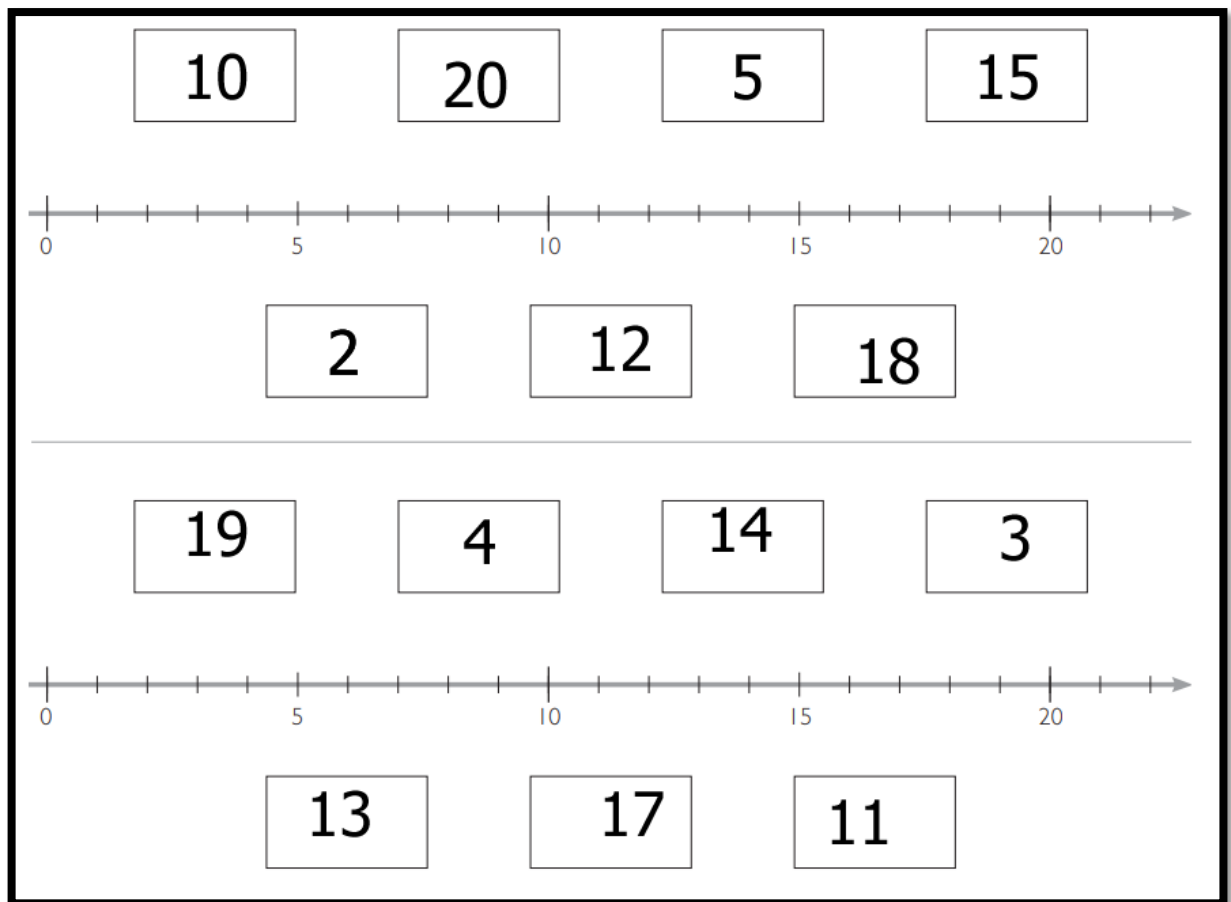
5 19 8 11 14

8 2 4 9

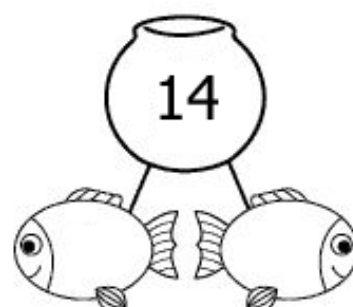
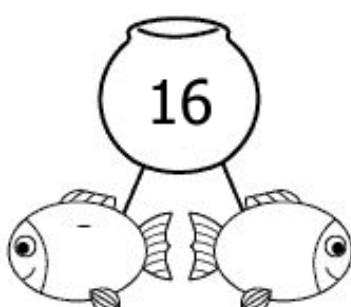
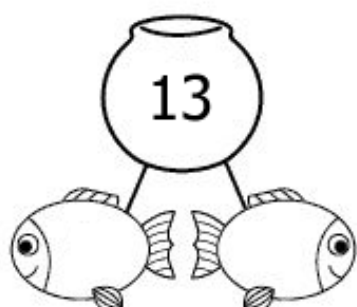

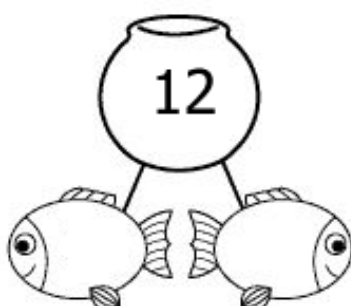
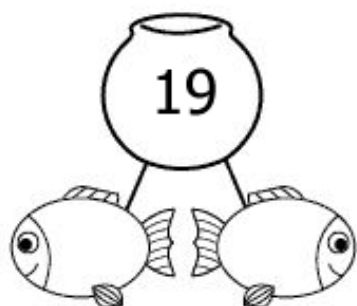
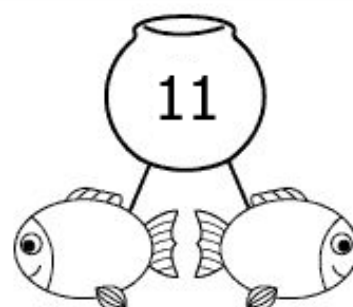
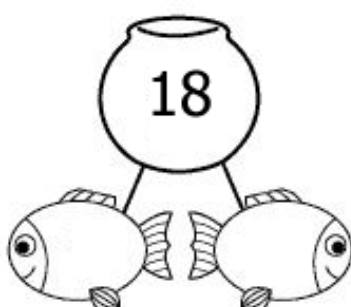
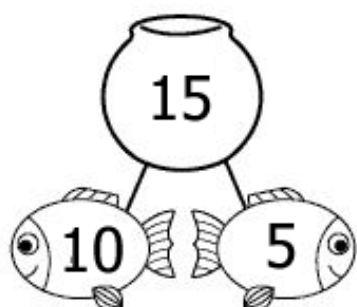
55 58 57 56 59



Lesið af og raðað á talnalínur



Tugir og einingar



Krónurnar okkar



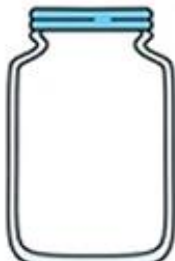
Hvað eru margar krónur í krukunum ?



Teiknaðu krónurnar í krukurnar ?




3



7



6



10



1



20



15



12



11



Hæfniviðmið febrúar – 6 ára 2025

1. Skipta tölum í tugi og einingar
2. Lesið af og raðað á talnalínur
3. Borið saman mishár tölur og raðað í rétta röð
4. Samlagning 0 – 20
5. Frádráttur 0 – 20
6. Telja smápeninga og borið saman mishár upphæðir
7. Týndar tölur – finna óþekkta stærð
8. Mæla lengd hluta
9. Greina þrívíð form – kúlur, sívalinga, ferstrendingar
10. Halda áfram með mynstur